

# STAR PUBLIC SCHOOL

Dear Parents,

Today's assignment ( class 1st)

👉 **Maths- Subtraction Sums in maths Book ( Page Number 42 & 44 )**

👉 **Noun Activity in ground**

👉 **इ की मात्रा वाले शब्द ( Reading)**

Home Assignment -

👉 **Maths - Learn Tables 2 to 7**

## Remember

Move one step backward to subtract 1 from a number.

## Common mistake

In subtraction, do not move towards the right on the number line. Always move towards the left to subtract.

CW

## Apply

14.05.25

1. Fill in the blank boxes.

(a)  $6 - \boxed{1} = 5$

(c)  $7 - \boxed{0} = 7$

(e)  $\boxed{6} - 6 = 0$

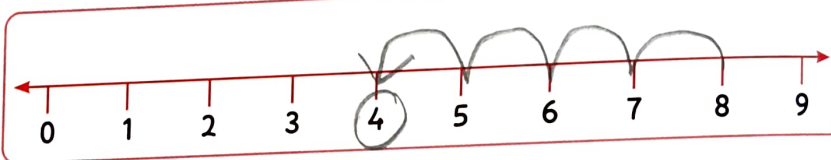
(b)  $\boxed{8} - 0 = 8$

(d)  $9 - 9 = \boxed{0}$

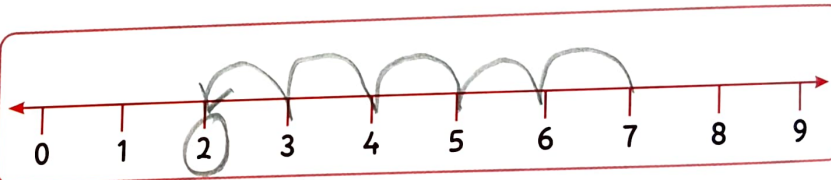
(f)  $\boxed{3} - 1 = 2$

2. Subtract the numbers on the number line.

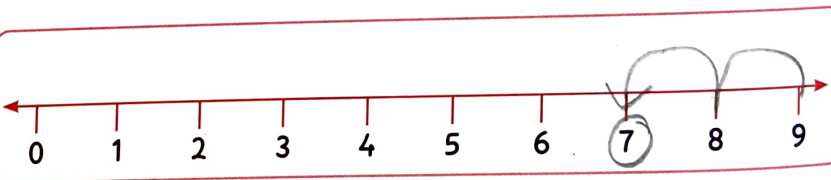
(a)  $8 - 4 = \boxed{4}$



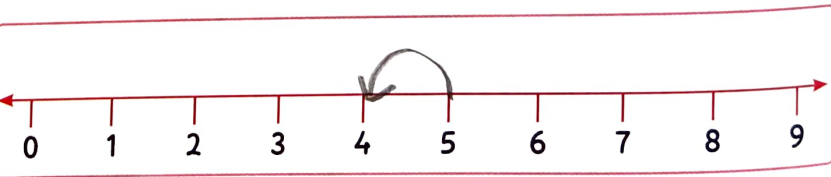
(b)  $7 - 5 = \boxed{2}$



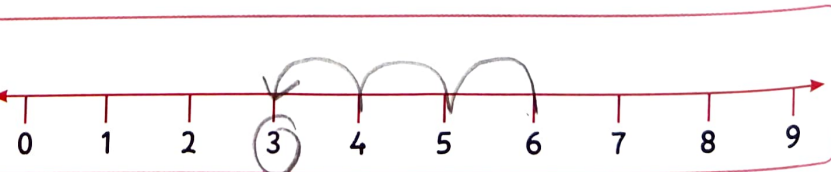
(c)  $9 - 2 = \boxed{7}$



(d)  $5 - 1 = \boxed{4}$



(e)  $6 - 3 = \boxed{3}$



## Apply

1. Subtract the numbers to find the difference.

(a) 
$$\begin{array}{r} 7 \\ - 4 \\ \hline 3 \end{array}$$

(b) 
$$\begin{array}{r} 6 \\ - 1 \\ \hline 5 \end{array}$$

(c) 
$$\begin{array}{r} 3 \\ - 0 \\ \hline 3 \end{array}$$

(d) 
$$\begin{array}{r} 3 \\ - 2 \\ \hline 1 \end{array}$$

(e) 
$$\begin{array}{r} 5 \\ - 5 \\ \hline 0 \end{array}$$

(f) 
$$\begin{array}{r} 9 \\ - 6 \\ \hline 3 \end{array}$$

(g) 
$$\begin{array}{r} 8 \\ - 2 \\ \hline 6 \end{array}$$

(h) 
$$\begin{array}{r} 6 \\ - 4 \\ \hline 2 \end{array}$$

(i) 
$$\begin{array}{r} 4 \\ - 2 \\ \hline 2 \end{array}$$

(j) 
$$\begin{array}{r} 9 \\ - 3 \\ \hline 6 \end{array}$$

(k) 
$$\begin{array}{r} 3 \\ - 1 \\ \hline 2 \end{array}$$

(l) 
$$\begin{array}{r} 5 \\ - 4 \\ \hline 1 \end{array}$$

2. Solve the following word problems.

- (a) There are 4 monkeys on a tree. 3 jump away. How many monkeys are left on the tree?

1 monkeys are left on the tree.

$$\begin{array}{r} 4 \\ - 3 \\ \hline 1 \end{array}$$

- (b) Samaira has 7 sketch pens. She loses 3 sketch pens. How many sketch pens were left with her?

4 sketch pens are left.

$$\begin{array}{r} 7 \\ - 3 \\ \hline 4 \end{array}$$

- (c) There are 8 cups on a table. Shreya takes away 3 cups. How many cups are left on the table?

5 cups are left on the table.

$$\begin{array}{r} 8 \\ - 3 \\ \hline 5 \end{array}$$

- (d) There are 9 donuts in a box. Atishi takes out 6 donuts. How many donuts are left in the box?

3 donuts are left in the box.

$$\begin{array}{r} 9 \\ - 6 \\ \hline 3 \end{array}$$