

# **STAR PUBLIC SCHOOL**

Dear Parents,

Today's assignment ( class 2 nd)

 **EVS - Lesson - 6 Question and answers**

 **Maths - Lesson - Time in book**

Home Assignment-

 **Maths - Lesson- time (do this question in notebook)**

3:54 pm ✓

18-0825

Q.2

## Quarter To

In the **quarter past** format, the hour hand is read by the bigger marking it has crossed.

But in the **quarter to** format, the hour hand is read by the bigger marking it is about to reach.

When the minute hand is at 9, it shows 45 ( $9 \times 5 = 45$ ) minutes. The time is read as **quarter to** an hour.

In the given clock, the minute hand is at 9.


So, it is  $9 \times 5 = 45$  minutes.

The hour hand has crossed 7 and is about to reach 8.

The time is **7:45** or **quarter to 8**.


### Keep in Mind

When we divide a clock into 4 parts, each part is a quarter. Quarter to is used for the fourth quarter.



**A** Write the time shown by the given clocks in two ways.

(a)




1 : 30

or

Half Past 1

(b)




8 : 15

or

Quarter past 8

(c)




5 : 45

or

Quarter to 6

(d)




2 : 45

or

Quarter to 3

(e)




2 : 30

or

Half Past 2

(f)



12 : 15

or

Quarter Past 12