

***STAR PUBLIC SCHOOL**


Dear Parents,

Today's assignment (class 1 st)

 **Math *Math revision of Addition,
subtraction shapes**

*

Home Assignment-

 **Maths - Do shapes, addition,
subtraction in notebook**

3:19 pm ✓✓

8/9/25

Mats in

Tuesday



DATE

PAGE

Cow

Revision

① understand the positional words

1 - first ✓

8 - Eighth ✓

7 - seventh ✓

4 - fourth ✓

2 - second ✓

3 - Third ✓

6 - Sixth ✓


10 - Tenth ✓

② fill in the blanks.






a) Toy car is on below (on/ near) the
sidetable ✓

b) Robot is in (in/out) the cupboard ✓

c) clock is over (over/under) the wall
drawings

③ Shapes name ④  circle ✓



- ①  - Rectangle ✓
- ②  - ~~Square~~  - oval ✓
- ③  - Triangle ✓
- ④  - Square ✓

Addition

$$\begin{array}{r} 10 \\ 2 \\ + 6 \\ \hline 8 \end{array}$$

$$\begin{array}{r} 10 \\ 3 \\ + 5 \\ \hline 8 \end{array}$$

$$\begin{array}{r} 10 \\ 4 \\ + 8 \\ \hline 12 \end{array}$$

$$\begin{array}{r} 10 \\ 9 \\ + 10 \\ \hline 14 \end{array}$$

⑤ Subtraction

$$\begin{array}{r} 10 \\ - 8 \\ - 4 \\ \hline 4 \end{array}$$

$$\begin{array}{r} 10 \\ 7 \\ - 5 \\ \hline 2 \end{array}$$

$$\begin{array}{r} 10 \\ 3 \\ - 2 \\ \hline 1 \end{array}$$

$$\begin{array}{r} 10 \\ 5 \\ - 3 \\ \hline 2 \end{array}$$



DATE _____

PAGE _____

⑥

Add the numbers

$$\begin{array}{r} \text{TO} \\ 32 \\ + 5 \\ \hline 37 \end{array}$$

$$\begin{array}{r} \text{TO} \\ 83 \\ + 1 \\ \hline 84 \end{array}$$

$$\begin{array}{r} \text{TO} \\ 15 \\ + 3 \\ \hline 18 \end{array}$$

$$\begin{array}{r} \text{TO} \\ 22 \\ + 7 \\ \hline 29 \end{array}$$

$$\begin{array}{r} \text{TO} \\ 62 \\ + 3 \\ \hline 65 \end{array}$$

✓ ✓ ✓ ✓ ✓
~~9/9/25~~