

# STAR PUBLIC SCHOOL

Dear Parents,  
Today's classwork

## **Maths**

Pt-1 Revision ( worksheet )  
(In notebook )

## **Games**

## **Today's Homework**

## **Maths**

- 1) Learning - 1 to 50 Number names
- 2) Maths worksheet ( number line and backward counting)

PT-1

Revision



DATE

1-7-26

PAGE

31

C, W

Q.1 Write the number <sup>names</sup> names

1) 10 Ten ✓

2) 21 Twenty-one ✓

3) 30 Thirty ✓

4) 35 Thirty-five ✓

5) 43 Forty-three ✓

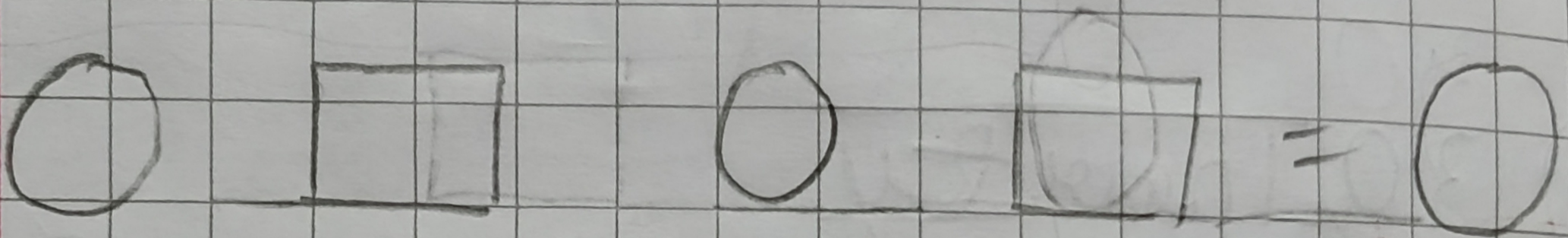
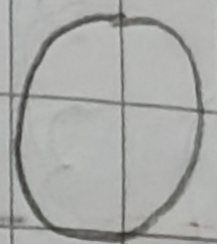
Q.2. Fill in the blanks.


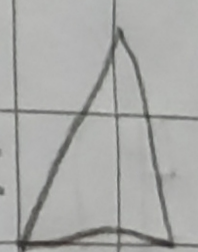
1) What comes before 10. 9

2) What Comes before 50, 40

3) What Comes after 19, 20

4) What Comes after 35, 36

5)  = 

6)  = 

Q.3 Before, After and in between

1. 16, 17, 18

2. 30, 31, 32

3. 25, 26, 27

4. 41, 42, 43

Q4 Count and Write.

1.  $\text{పది} + \text{పది} = \underline{20}$

2.  $\text{పది} + \text{పది} = \underline{20}$

3.  $0 + 00 + 000 = \underline{0}$

4.  $\text{పది} + \text{పది} = \underline{20}$

Q5 Ordering Number

1. Ascending Order



1. 15, 18, 10, 20

Ans 10, 15, 18, 20

2. 35, 9, 20, 21

1 - 9, 20, 21, 35

2. Descending Order

?  
1. 22, 45, 12, 10

1 - 45, 22, 12, 10

Q6. Add the numbers

$$1. \begin{array}{r} 1 \\ + 2 \\ \hline 3 \end{array}$$

$$2. \begin{array}{r} 3 \\ + 5 \\ \hline 8 \end{array}$$

$$3. \begin{array}{r} 1 \\ 2 \\ + 2 \\ \hline 5 \end{array}$$

$$4. \begin{array}{r} 5 \\ 1 \\ + 2 \\ \hline 8 \end{array}$$

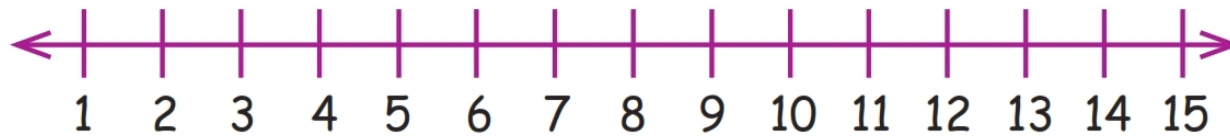
$$5. \quad 2 + 2 = 4$$

$$6. \quad 6 + 3 = 9$$

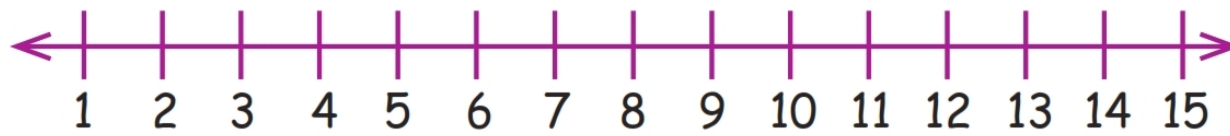
# Addition on Number Line

Add and show on the number line:

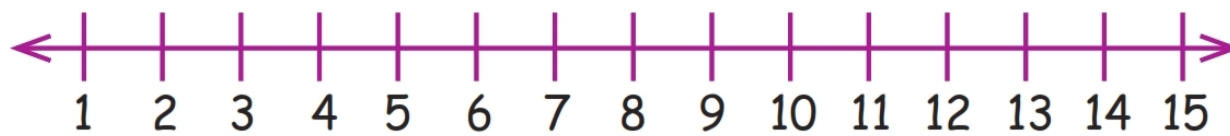
1.  $3 + 5 =$



2.  $2 + 9 =$



3.  $9 + 6 =$



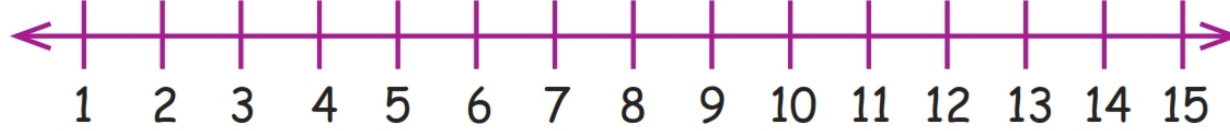
4.  $8 + 7 =$



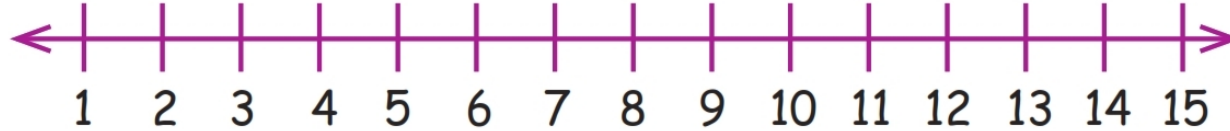
5.  $10 + 3 =$



6.  $13 + 1 =$



7.  $11 + 2 =$



# Counting Backwards

18      12

30      24

42      36

54      48

66      60

78      72

90      84