


# STAR PUBLIC SCHOOL

Dear Parents,  
Today's classwork

## English

 Ch-1, que/ans

## Maths


 Place value, que 6,7,8  
Pg. 9,10

## Hindi

 Ch-2 reading/explanation

 Activity pg.9 + back exercises

## Today's Homework

 Maths , que.9, pg.10 and learn tables  
from 2 to 5

 English, que.E pg.3

 Hindi, que.4 pg.14

20/4/26

Monday



DATE

PAGE

## BIRD SONG

1. What do the birds do the whole day long. How do they feel about their work?

Ans The birds sing and work all day long. They feel happy and merry while they work.

2. What does the daily routine of the birds look like?

Ans In the morning they sing and wake up. At noon they keep building and arranging their nest in the



evening they sing and as the sun sets they cackle in the branches and get ready to sleep at night they sleep and then wake up again in the morning.

3 What materials do the birds use to decorate their homes?

Ans They use moss, twigs, feathers, flowers, leaves and stems to make their nest nice.

4 where and when do the birds nest



ans The birds rest in their nests  
in the branches of the  
trees in the evening when  
the sun goes down

5 How do the birds sleep through  
the night

Ans They are joyful and full of  
energy when they wake up  
and sing a happy song.

6 How is the mood of the  
birds when they wake up in  
the morning?



Ans The birds are in a happy, cheerful and energetic mood when they get up in the morning.

~~Answer~~

20/4/26

शनिवार

DATE \_\_\_\_\_

PAGE 3

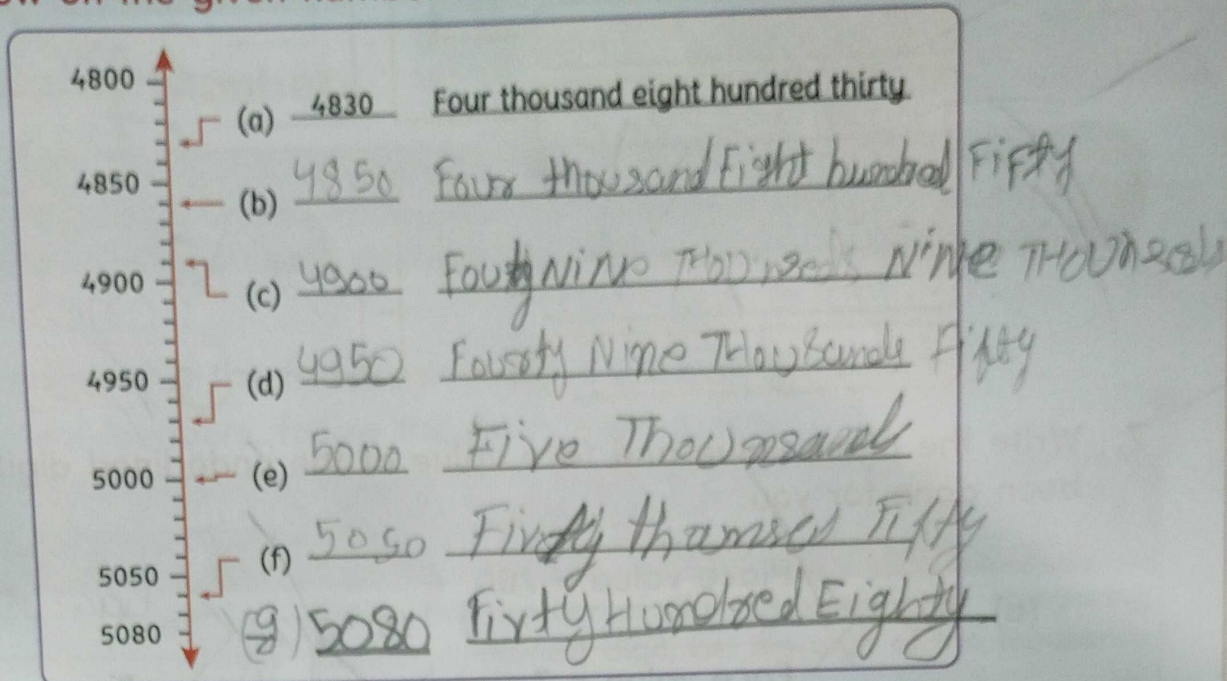
पाठ  $\Rightarrow$  2 महजती चिटी

श्रुतलखः

- 1) टिड्डा
- 2) खट खटाया
- 3) इकादो
- 4) थक्हार
- 5) निवहि
- 6) आलस्य
- 7) मूसलाधार
- 8) कविष्य
- 9) ध्याज
- 10) मौल - मस्ती

*Range-fa.*

4. Write the number and the number name of the numbers indicated using an arrow on the given number line. One has been done for you.



5. Complete the given number grids.

(a)	1001	1002	1003	1004	1005	1006	1007	1008	1009	1000
(b)	2971	2972	2973	2974	2975	2976	2977	2978	2979	2980
(c)	6781	6782	6783	6784	6785	6786	6787	6788	6789	6790
(d)	8591	8592	8593	8594	8595	8596	8597	8598	8599	8600
(e)	9881	9882	9883	9884	9885	9886	9887	9888	9889	9890

6. Write the place value of each digit for the given numbers. One has been done for you.

(a)

4 7 8 6

4 thousands = 4000

7 hundreds = 700

8 tens = 80

6 ones = 6

(b)

6 5 4 3

6 thousands = 6000

5 Hundred = 500

4 tens = 40

3 ones = 3

(c)

8 Thousand = 8000  
1 Hundred = 100

8 1 0 2

2 ones = 2

0 tens = 0

(d)

5 Thousand = 5000  
7 Hundred = 700

5 7 2 8

8 ones = 8

2 tens = 20

7. Write the place value and face value of the underlined digits. One has been done for you.

(a) 8772  
Place value = 700  
Face value = 7

(b) 6724  
Place value = 20  
Face value = 2

(c) 7274  
Place value = 7000  
Face value = 7

(d) 9836  
Place value = 30  
Face value = 3

8. Complete the given table.

S. No.	Standard Form	Expanded Form
(a)	8264	8000 + 200 + 60 + 4
(b)	6539	6000 + 500 + 30 + 9
(c)	2094	2000 + 90 + 4
(d)	9951	9000 + 900 + 50 + 1
(e)	8973	8000 + 900 + 70 + 3
(f)	4395	4000 + 300 + 90 + 5

Rany

## 2

## मेहनती चींटी

## शैक्षणिक उद्देश्य

- परिश्रम का महत्व जानना
- आलस्य न करना
- कर्म की प्रधानता
- दूसरों की मदद करना
- किसी का मजाक न उड़ाना

## पाठ-परिचय

रानी चींटी खूब काम करती थी, जबकि टिट्ठा बहुत आलसी था। वह हर समय उछल-कूद करता था। एक बार बहुत तेज़ बरसात हुई, तो टिट्ठा बरसात में भीग गया। वह चींटियों के पास गया। रानी चींटी ने उसे आदर के साथ अंदर बुलाया और प्यार से भोजन भी खिलाया। यह देखकर टिट्ठा बहुत शर्मिदा हुआ और उसने रानी चींटी से माफ़ी माँगी।

## व्याकरण-बिंदु

- संज्ञा शब्द
- वचन
- समान अर्थवाले शब्द


APC



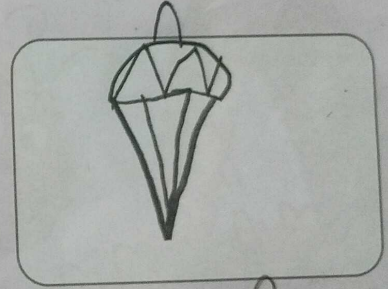
## चलें पाठ की ओर

गरमी तथा सरदी के मौसम में आने वाले फल व सब्जियों के चित्र बनाइए और उनके नाम लिखिए-

गरमी का मौसम




फल - आम




सब्जी - कीटनी

सरदी का मौसम



फल - सेब



सब्जी - गाजर

Rajni

1. What do you learn from the birds' daily routine?
2. What does the birds' song tell you about their attitude towards life?

## Language Link

### Vocabulary

The noun *birdsong* refers to the musical sounds made by birds. The search given below contains nine types of sounds birds make to each other. Find and circle them.

P	S	Q	U	A	W	K	Q	R	C
A	C	U	B	E	F	H	T	I	R
K	R	A	C	E	D	J	W	L	O
M	E	C	H	I	R	P	I	N	W
O	E	K	P	O	Q	Y	T	R	A
X	C	Z	X	T	O	F	T	D	C
Y	H	V	W	U	Q	T	E	Z	O
W	H	I	S	T	L	E	R	Q	O



## We and the World

1. Have you ever seen a bird's nest around your house? If yes, do you know which bird built it? Birds build nests to lay their eggs and raise their young ones. Do any species of birds choose different places to build nests. Choose any five different species of birds and find out where they build their nests. Paste pictures of the nests and write the names of the species alongside the pictures. Also, mention the life of your favourite animal.

(c)	2094	
(d)		$9000 + 900 + 50 + 1$
(e)	8973	
(f)		$4000 + 300 + 90 + 5$

9. Mehul wrote the following number names in his notebook. Help Mehul to identify the mistakes and rectify them.

(a) 462 - four sixty two

(b) 8636 - eighty six thirty six

(c) 009 - nine thousand

(d) 1047 - ten forty seven

(e) 7007 - seven hundred seven

(f) 3650 - three six fifty

4. कौन था कैसा? सही शब्द चुनकर चित्र के सामने लिखिए-

बुद्धिमान चंचल मेहनती आलसी  
कामचोर दयालु परोपकारी मूर्ख

