


STAR PUBLIC SCHOOL

Dear Parents,
Today's classwork

English Grammar


 Ch-2 Naming words page no 6,7

Maths


 Ch-2

Addition + number line in copies

E.V.S

 Ch-2 my smart body
(explanation)

Today's Homework

 Maths - addition and Number line
in book page no - 24,25 (Question
no 4,5)

 English Grammar - ch-2 Naming
words page no - 7 (D)



23/04/20

Revision

$$1) \quad 7 + \boxed{2} = 9$$

$$2) \quad 5 + \boxed{3} = 8$$

$$3) \quad 6 + \boxed{4} = 10$$

$$4) \quad 9 + \boxed{1} = 10$$

$$5) \quad 8 + \boxed{1} = 9$$

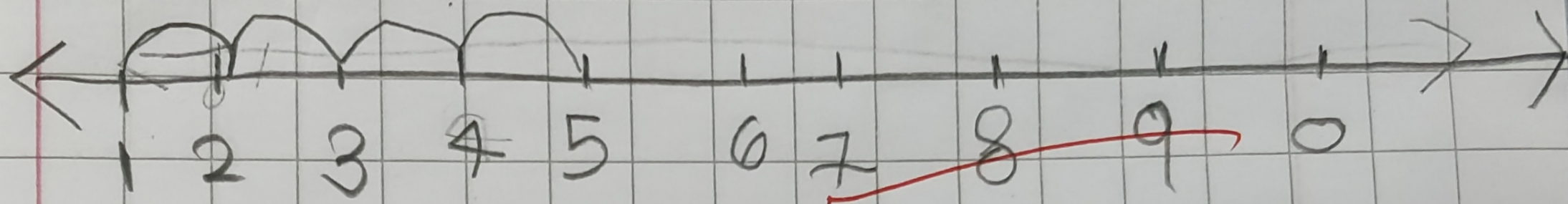
23 | 04126

Numbour line

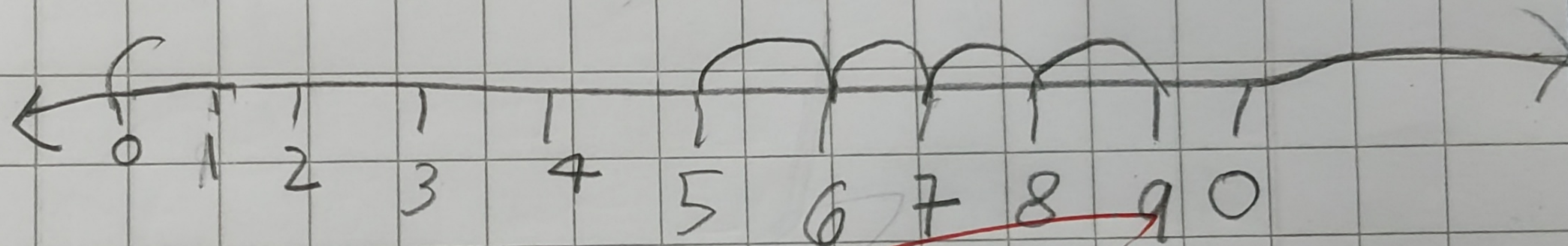
DATE

PAGE

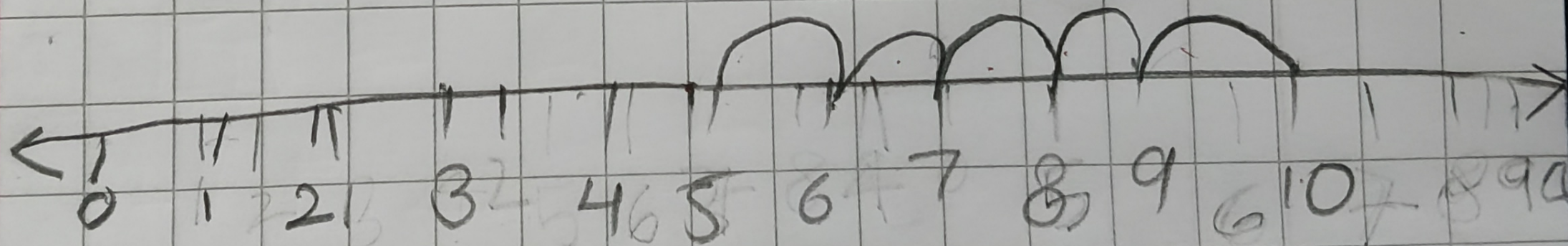
① $1+4=5$



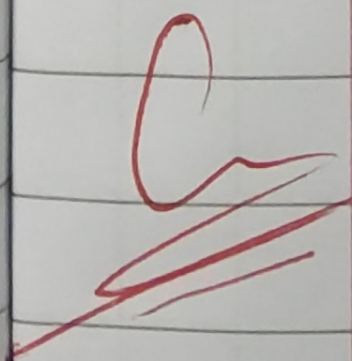

② $5+4=9$



③ $5+5=10$



★ $5+5=10$



B Here are the pictures of some animals. Choose the correct **naming words** from the box. Write them below their pictures.

pangolin bull cheetah lemur hare rabbit



1. a cheetah



2. a pangolin



3. a hare



4. a bull



5. a rabbit



6. a lemur

C Tick (✓) the boxes beside the **correct words** to name these people.

1. Who sells food and other items for homes?

- a cook a dancer a dentist a grocer

2. Who looks after patients in a hospital?

- a painter a tailor a nurse a grocer

3. Who delivers letters?

- a carpenter a cobbler a grocer a postman

4. Who makes furniture?

- a plumber a cobbler a grocer a carpenter

5. Who repairs taps and pipes?

- a gardener a grocer a chemist a plumber

1. Fill in the blank.
Teddy was initially with his appearance

2. Write whether true or false.
Teddy remained tubby de

F Complete these sentences with suitable **naming words**.

sweater bathroom clothes sandwich rain

1. Tia is brushing her teeth in the bathroom



2. Nayan is walking in the rain

3. Samar is eating a sandwich




4. Shivam is dressed in warm clothes

5. Granny is knitting a sweater




G Look at the string of letters given below. There are some **naming words** hidden in it. Circle the words. Write them in the blanks under the correct pictures.

B E A M G O R I L L A G U I T A R
V I O L I N B U S Y A K



1. BEAM



2. gorilla



4. Fill in the blank boxes.

(a) $7 + 2 = \square$

(b) $1 + \square = 8$

(c) $5 + \square = 8$

(d) $\square + 4 = 7$

(e) $4 + 4 = \square$

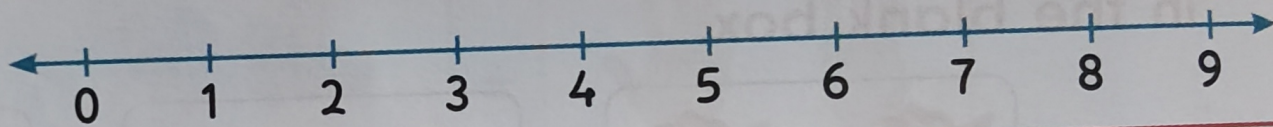
(f) $3 + \square = 6$

(g) $2 + \square = 7$

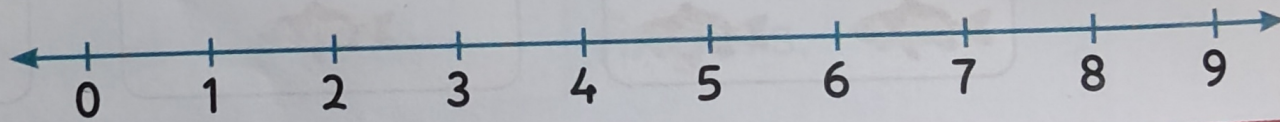
(h) $\square + 2 = 6$

5. Add the numbers on the number line.

(a) $7 + 1 = \square$



(b) $4 + 5 = \square$



Mr Chessy, the
Let us help Mr

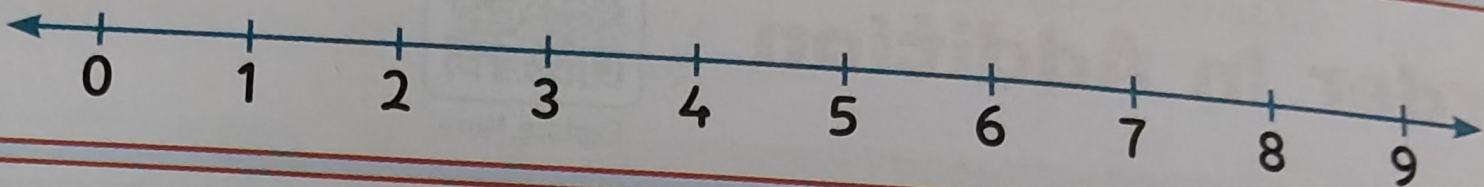


Now, Mr C
the same r
Can you t
more peo
Let us un

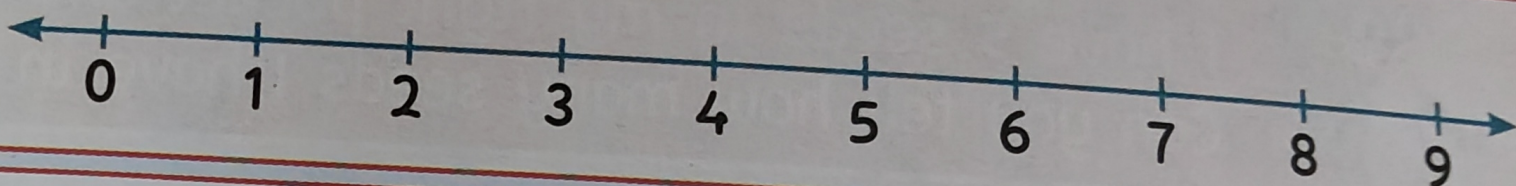
When

1. How did T
2. How much

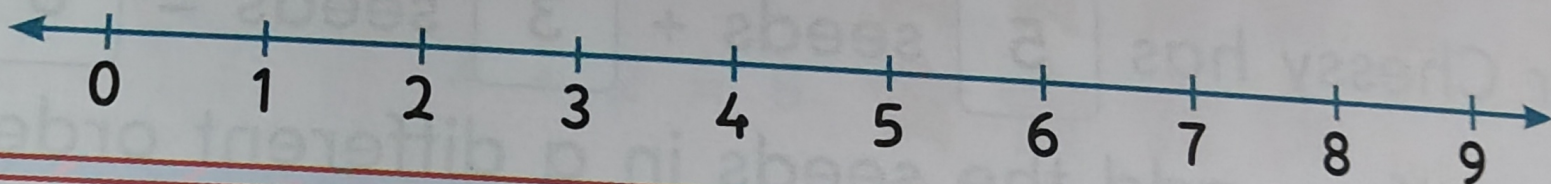
(c) $6 + 2 = \square$



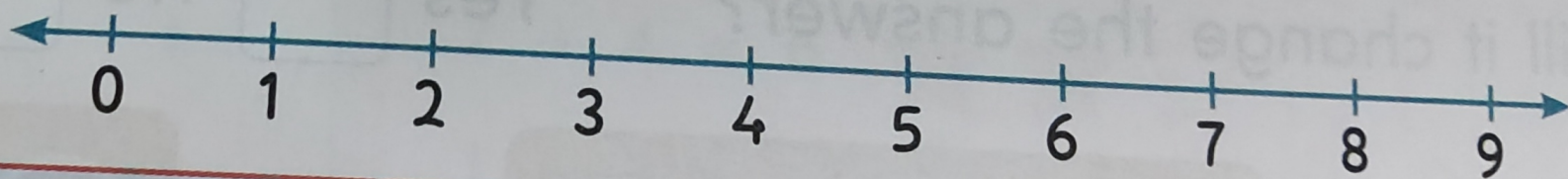
(d) $1 + 4 = \square$



(e) $3 + 6 = \square$



(f) $2 + 5 = \square$



Learn and Understand

Adding Zero and One



- Adding Zero and One
- Order in Addition
- Addition Facts

D Look at these pictures. Then fill in the blanks with the correct naming words.

1. A squirrel is eating a nut.



2. An elephant is plucking bananas.



3. A monkey is swinging from a tree.



4. Mother Bird is feeding her birds in her nest.



5. A frog is jumping into the pond.

E Match the columns.

A	B
1. The children play in	a. a bank.
2. Birds sing in	b. an office.
3. Vishwa withdraws money from	c. trees.
4. Suhana buys medicines from	d. a playground.
5. Rina's mother works in	e. a pharmacy.