


# STAR PUBLIC SCHOOL


Dear Parents,  
Today's classwork


## **Maths**

 Ch-2

Addition sums + number line ( page  
no 31 ) in book

## **English**

 Ch-1 sentence making ( in copy)

 Ch- 2 clever batty ( explanation)

\*Today's Homework\*

## **English**

ch-2 clever batty ( reading)

## **Maths**

Number line worksheet

29-04-26

ch-1



DATE

PAGE CW

sentence making

1) tail = ~~the~~ dog has a tail

2)

lion = ~~The~~ lion is a big

animal

3) shopman = ~~The~~ shopman

sell toys

4) buy = ~~I~~ will buy a car


5) sixpence = ~~I~~ have a sixpence


coin.


29104126

## Apply

1. Count the objects and add.

(a)  =  $\boxed{2} + \boxed{1} + \boxed{5} = \boxed{8}$

(b)  =  $\boxed{2} + \boxed{3} + \boxed{1} = \boxed{6}$

(c)  =  $\boxed{5} + \boxed{3} + \boxed{1} = \boxed{9}$

2. Fill in the blank boxes.

(a)  $1 + 4 + 2 = \boxed{7}$

(b)  $1 + 3 + 4 = \boxed{8}$

(c)  $\boxed{0} + 1 + 5 = 6$

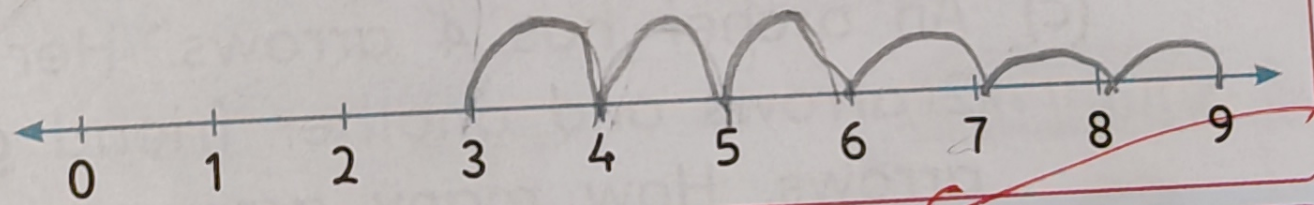
(d)  $3 + \boxed{2} + 2 = 7$

(e)  $6 + 1 + \boxed{2} = 9$

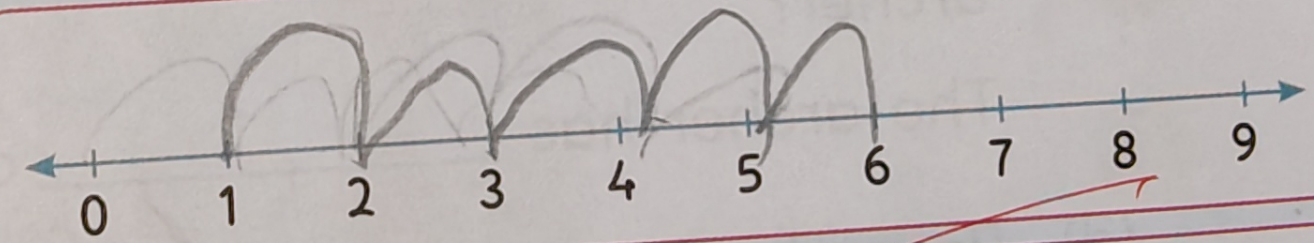
(f)  $5 + \boxed{1} + 2 = 8$

3. Add the numbers using number line.

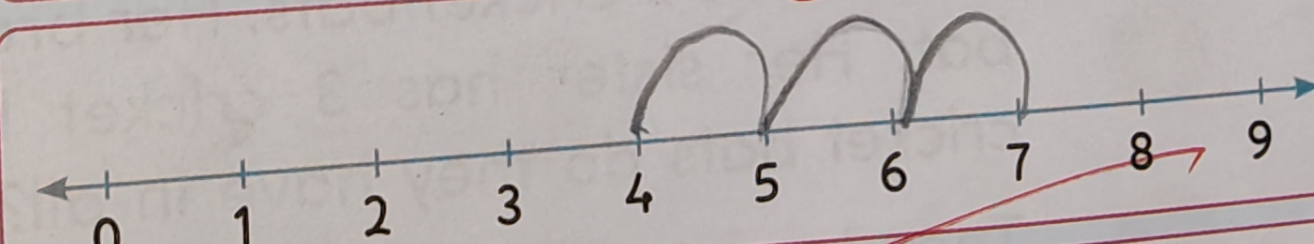
(a)  $3 + 2 + 4 = \boxed{9}$



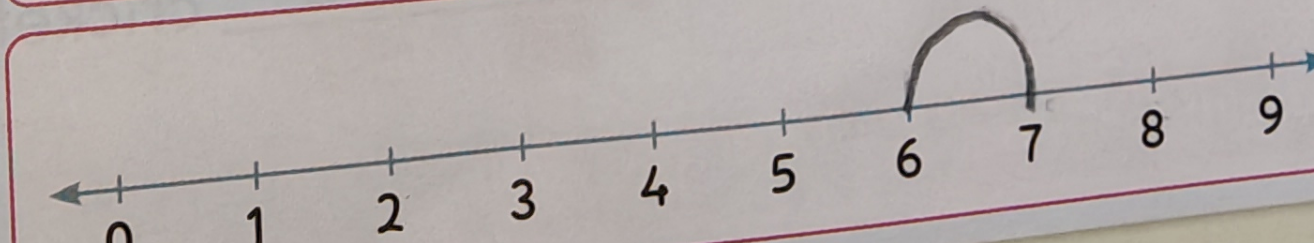
(b)  $1 + 3 + 2 = \boxed{6}$



(c)  $4 + 1 + 2 = \boxed{7}$



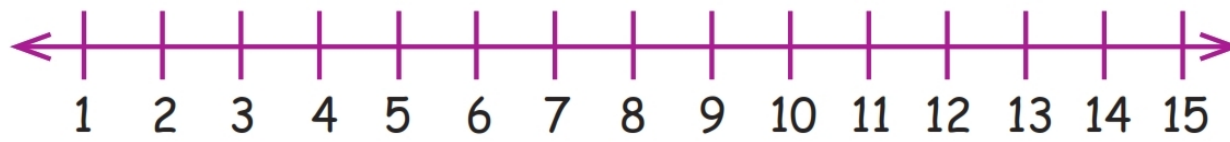
(d)  $6 + 1 + 0 = \boxed{7}$



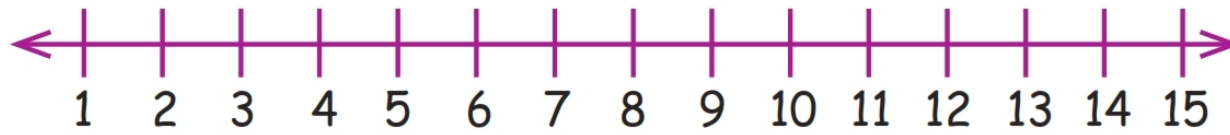
# Addition on Number Line

Add and show on the number line:

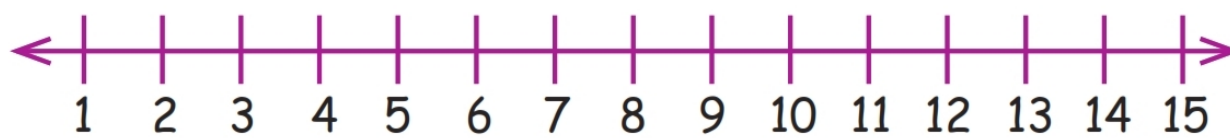
1.  $9 + 4 =$



2.  $6 + 7 =$



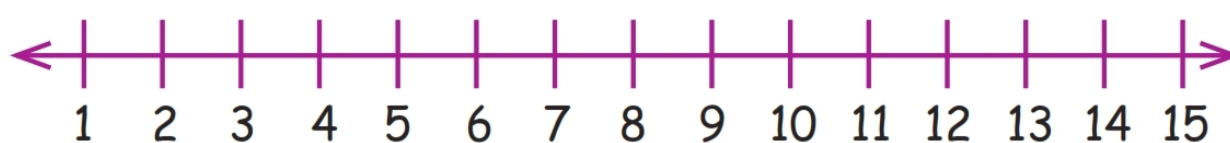
3.  $9 + 1 =$



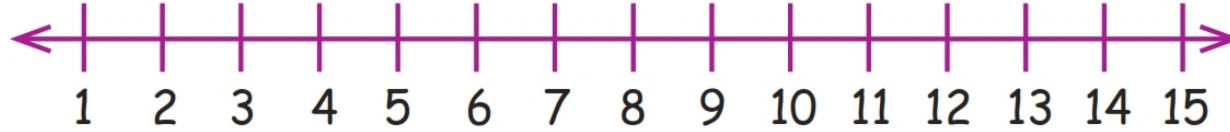
4.  $6 + 3 =$



5.  $11 + 4 =$



6.  $12 + 1 =$



7.  $1 + 4 =$

