

STAR PLAY SCHOOL

Dear Parents

Today's Assignment

MATHS

Did pg no.19,20 &23 in book.

ART

Did colouring in  rainbow.

HOME CONNECTOR

MATHS

Do pg no-23 in book.

Do colouring in car in book.

12:41 pm ✓✓

Hw 20.4.24

4 Colour the triangles and write the addition facts for 6. A few have been coloured.

$$6 + 0 = \square$$

$$5 + 1 = 6$$

$$4 + 2 = 6$$

$$\square + \square = \square$$

$$\square + \square = \square$$

$$\square + \square = \square$$

$$\square + \square = \square$$



There are $\square + \square = \square$ addition facts for 6.

Hw 20.4.24

5 Colour the boxes and write the addition facts for 7. A few have been coloured.

$$7 + 0 = \square$$

$$\square + \square = \square$$

$$\square + \square = \square$$

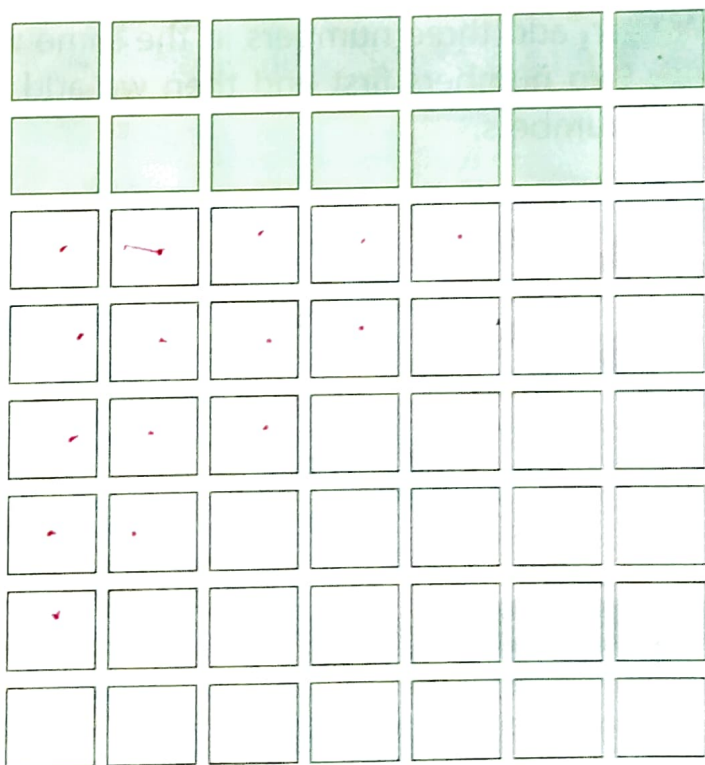
$$4 + \square = 7$$

$$3 + \square = 7$$

$$\square + \square = \square$$




$$\square + \square = \square$$




$$\square + \square = \square$$






There are $\square + \square = \square$ addition facts for 7.




B Check the addition. Then, put a tick (✓) for the correct answer or a cross (✗) for the wrong answer in the boxes.




(a)  +  =  ✓

(b)  +  =  ✗

(c)  +  =  ✓

C Count the pictures and then add the groups.

(a)  +  =  ✓

(b)  +  =  ✓

Adding Zero

When we add 0 to a number, we get the same number.




 +  = 

2 + 0 = 2

2 pencils plus 0 pencils equals 2 pencils.

Adding One

When we add 1 to a number, we get the number that comes just after it.

 +  = 

4 + 1 = 5

4 crayons plus 1 crayon equals 5 crayons.

For the Teacher

Use objects such as marbles, ice cream sticks and chalks to show addition up to 10.

CW

20/4/24

Colourful Rainbow

Colour the rainbow as indicated. Use pencil colours.



Fine motor skills, Cognition, Spatial awareness

FACT HUNT

A rainbow has seven colours. They are violet, indigo, blue, green, yellow, orange and red.



✓ Good

Your Performance



The number we get on adding two or more numbers is called the **sum**.



When we put 3 blocks and 4 blocks together, we get 7 blocks in all. We read it as 3 blocks plus 4 blocks equals 7 blocks or $3 + 4 = 7$.

Know More

We can also add numbers using fingers. Let's add 3 and 4.

- Close your fists. Count the first number 3 on your left fist. Open 3 fingers on your left fist and keep folding the remaining.
- Now count the second number 4 using the remaining fingers. Open 4 more fingers.
- Count the total number of fingers. These are 7. Therefore $3 + 4 = 7$.



Try It Out

(a) $1 + 4 = 5$ (b) $2 + 3 = 5$ (c) $2 + 6 = 8$

A Count and write how many objects are there.



2 cones of ice cream plus 4 cones of ice cream equals 6 cones of ice cream.



3 books plus 5 books equals 8 books.


Handwriting practice
Tracing and cutting



Fine motor skills Eye hand
coordination (concentration)

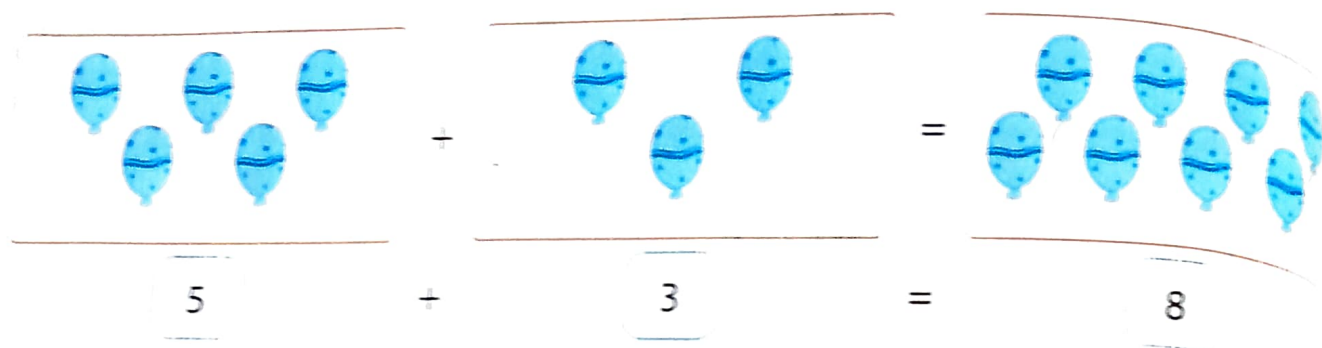


Thank and tell
all the children
about their work



Your Performance
★★★★★





So, $3 + 5 = 8$ and $5 + 3 = 8$.

20/4 **E** ^{cu} Add the given numbers. Write the answer in the space provided.

(a) $5 + 1 = 1 + 5 =$

6

(b) $4 + 5 =$

9

$= 5 + 4$

(c) $3 + 6 =$

9

$= 6 + 3$

(d) $7 + 1 = 1 + 7 =$

8

Addition Facts

We can write a number as a sum or combination of two numbers. For example, number 3 can be written as $0 + 3 = 3$, $1 + 2 = 3$, $2 + 1 = 3$ or $3 + 0 = 3$. These are called **addition facts** of 3.


Every number has one more addition fact than the number itself. Let's see the addition facts of some numbers.

Addition Facts for 4

$4 + 0 = 4$



$3 + 1 = 4$




$2 + 2 = 4$



$1 + 3 = 4$



$0 + 4 = 4$



Addition Facts for 5

$5 + 0 = 5$



$4 + 1 = 5$



$3 + 2 = 5$



$2 + 3 = 5$



$1 + 4 = 5$



$0 + 5 = 5$



There are $4 + 1 = 5$ addition facts for 4 and $5 + 1 = 6$ addition facts for 5.