

STAR PUBLIC SCHOOL

Dear Parents,

Today's assignment (class 1st)

👉 **Maths - Lesson - 6 (Page number 89 & 92) in book**

👉 **EVS - Lesson - 3 (Difficult words test)**

👉 **Dance For Rainy day**

Home Assignment -

👉 **English - Lesson - 6 Difficult words + Word meanings in english notebook**

👉 **Maths - Page number 93 in book**

Edited 2:15 pm ✓

18-07-25

Test

L-3

Difficult Words

- 1.
- 2.
- 3.
- 4.
- 5.
- 6.
- 7.
- 8.
- 9.
- 10.

18-07-25

pg - 92

1. (a) 26 is greater than 20 (b) 90 is Smaller than 91
 (c) 74 is Smaller than 7. (d) 51 is greater than 15.
 (e) 88 is greater than 7. (f) 63 is greater than 1.

2. (a) $26 > 20$ (b) $17 < 71$
 (c) $87 = 87$ (d) $56 < 65$
 (e) $24 > 17$ (f) $60 > 16$
 (g) $87 > 54$ (h) $96 \geq 85$


3. (a) $\overset{\times}{43}$ $\overset{\vee}{37}$ $\overset{\vee}{21}$ (b) $\overset{\vee}{34}$ $\overset{\times}{65}$ $\overset{\times}{88}$
 (c) $\overset{\vee}{19}$ $\overset{\times}{25}$ $\overset{\times}{60}$ (d) $\overset{\vee}{62}$ $\overset{\times}{66}$ $\overset{\vee}{61}$
 (e) $\overset{\vee}{55}$ $\overset{\times}{59}$ $\overset{\vee}{49}$ (f) $\overset{\times}{74}$ $\overset{\vee}{9}$ $\overset{\vee}{47}$
 (g) $\overset{\vee}{13}$ $\overset{\times}{95}$ $\overset{\vee}{21}$ (h) $\overset{\vee}{11}$ $\overset{\vee}{22}$ $\overset{\times}{55}$

- 4 (a) $\textcircled{30}$ (b) $\textcircled{50}$
 (c) $\textcircled{90}$ (d) $\textcircled{56}$
 (e) $\textcircled{88}$ (f) $\textcircled{78}$

18.07.25 CW

6. Tick (✓) the number corresponding to the correct number of blocks. One has been done for you.

(a)




47 ☒ 42 52

(b)



13 ☒ 31 33


(c)



☒ 50 60 40


7. Draw beads on the abacus to show the given number.

(a)




58

(b)



62

(c)



49

8. Count and write the number shown by the beads on the abacus.

(a)


H T O



4 tens + 3 ones = 43

(b)

H T O



5 tens + 1 one = 51

Apply

1. Write 'greater' or 'smaller' in the following blanks.

- (a) 26 is greater than 20. (b) 90 is smaller than 91.
 (c) 74 is smaller than 79. (d) 51 is greater than 15.
 (e) 88 is greater than 77. (f) 63 is greater than 61.

2. Put the correct symbol $<$, $>$ or $=$ in the blank boxes.

(a) 26 $>$ 20

(b) 17 $<$ 71

(c) 87 $=$ 87

(d) 56 $<$ 65

(e) 24 $>$ 17

(f) 60 $>$ 16

(g) 87 $>$ 54

(h) 96 $>$ 86

3. Tick (✓) the smallest number and cross out (✗) the greatest number in each part. One has been done for you.

(a) ~~45~~ 37 ~~21~~

(b) ~~34~~ 65 ~~88~~

(c) 19 25 ~~60~~

(d) 62 ~~66~~ ~~61~~

(e) 55 ~~59~~ 49

(f) ~~74~~ 9 ~~47~~

(g) ~~13~~ ~~95~~ 21

(h) ~~11~~ 22 ~~55~~

4. Fill in the blank circles.

(a) 29 comes before 30.

(b) 50 comes after 49.

(c) 90 comes before 91.

(d) 55 comes before 56.

(e) 87 comes before 88.

(f) 78 comes after 77.

18/July/25 HW

5. Complete the following.

- (a) 93 95 98
- (b) 70 71 74
- (c) 50 52 54

6. Find the missing numbers using backward counting.

- (a) 90 87 86
- (b) 82 80
- (c) 63 61

7. Write the given numbers in ascending order. One has been done for you.

- (a) 19 15 31 28 Ascending order → 15 19 28 31
- (b) 22 45 31 56 Ascending order →
- (c) 73 87 62 81 Ascending order →

8. Write the given numbers in descending order. One has been done for you.

- (a) 81 79 82 61 Descending order → 82 81 79 61
- (b) 35 55 45 25 Descending order →
- (c) 10 30 50 80 Descending order →