

STAR PUBLIC SCHOOL

Dear Parents,

Today's assignment (class 2 nd)

👉 **Maths - Test of multiplication sums in notebook**

👉 **English - Lesson - 5 (back exercises)**

👉 **Hindi - Lesson - 6 (प्रश्न उत्तर)**

Home Assignment-

👉 **Maths - Do page numbers - 69, 70, 72 & 75 in book**

👉 **Maths - Lesson - 4 (Do all the word problems in notebook)**

There is complete silence in the class for some time. Then the children start talking to each other. Paul, the class leader, speaks.

Paul : Ma'am, could we go next Saturday instead of this Saturday?
Then Raja can also join us. All of us want to go together.

Teacher : Your care for each other has made me very happy and proud.
Now we will go next Saturday.

Everyone claps their hands and shouts joyfully.





Question Corner

A1. Choose the correct answer.

10.07.25

CW

1. Where were the children going for the trip?
a) ~~Puducherry~~ b) Panaji c) Patna
2. The students of Class 2
a) fight with one another.
b) ~~help one another.~~
c) do homework together.
3. A botanical garden is a place where
a) ~~various types of plants and trees are grown.~~
b) various types of boats are displayed.
c) various types of animals live.
4. Which of the following statements is true about the dome at Auroville?
a) It is built for children to play.
b) ~~You have to be quiet inside it.~~
c) It is not open to the public.



There is complete silence in the class for some time. Then the children start talking to each other. Paul, the class leader, speaks.

Paul : Ma'am, could we go next Saturday instead of this Saturday?
Then Raja can also join us. All of us want to go together.

Teacher : Your care for each other has made me very happy and proud.
Now we will go next Saturday.



Everyone claps their hands and shouts joyfully.



Question Corner

A1. Choose the correct answer. 10.07.25 CW

1. Where were the children going for the trip?
a) ☒ Puducherry b) Panaji c) Patna
2. The students of Class 2
a) fight with one another.
b) ☒ help one another.
c) do homework together.
3. A botanical garden is a place where
a) ☒ various types of plants and trees are grown.
b) various types of boats are displayed.
c) various types of animals live.
4. Which of the following statements is true about the dome at Auroville?
a) It is built for children to play.
b) ☒ You have to be quiet inside it.
c) It is not open to the public.



5. The teacher was happy and proud because
- Raja was not going for the trip.
 - the children clap loudly for her.
 - the children care for one another and want to go together.

A2. Who says the following? Write their names.

- 'When do we leave for Puducherry?'
- 'There are many places to see in Puducherry.'
- 'Is there a beach in Puducherry?'
- 'There is a huge dome and everyone has to keep quiet inside it.'
- 'All of us want to go together.'

Namrata

Ramesh

Mumtaz

Teacher

Paul

B



Word Corner

B1. Complete the words by writing the missing letters.

- We carry our food in this to school.

t _ i _ f _ f _ i _ n _ b _ o _ x



- All students look forward to this.

h _ o _ l _ i _ d _ a _ y

- The head of the school is called

p _ r _ i _ n _ c _ i _ p _ a _ l



- Students and teachers gather for this in the morning before school begins.

a _ s _ s _ e _ m _ b _ l _ y

B2. Match the following.

- | A | B |
|---|-------------------------------|
| 1. when no sound is heard | a) sandy land next to the sea |
| 2. outing | b) excited |
| 3. beach | c) quiet |
| 4. place where waste is thrown | d) trip |
| 5. place where sick people are looked after | e) dustbin |
| 6. very happy | f) hospital |



Listening Corner

C1. Complete the following while listening to the teacher.

Salim was doing his homework. Suddenly it started raining. He heard the cries of birds. He found that the Baby birds in the branch of the tree near his window were Frightened. He picked them up and put them in a Safe place. This act of kindness made him feel happy.

C2. Your teacher will ask you some questions. Listen carefully and answer.

E1. Fill in the blanks with the correct simple present tense forms of the verbs given in brackets. One has been done for you as an example.

The girl **cries** loudly. (cry)



1. Sujata likes my yellow frock. (like)
2. Our neighbours make a lot of noise at night. (make)
3. Ice melts in the sun. (melt)
4. Shashwat listens to his teachers carefully. (listen)
5. Tarun runs in the park every morning. (run)
6. Children love to get new toys. (love)
7. I watch TV in the evening. (watch)
8. My mother and uncle listen to old film songs in the afternoon. (listen)
9. My friend plays hockey on Sundays. (play)
10. A lizard lays many eggs. (lay)



Punctuation

A full stop (.) comes at the end of a telling sentence.

The children were very polite.

My name is Sanjay.

Puducherry is a clean place.

A question mark (?) comes at the end of a question or an asking sentence.

Where is your house?

Is your name Sanjay?

Is Puducherry a clean place?

E2. Put the correct punctuation mark at the end of each sentence.

1. What time is it
2. Is your uncle a good cook
3. Jyoti likes to read
4. It rained last Thursday
5. I like to sing
6. My father likes fish
7. When is your birthday
8. That puppy is cute
9. Is the kitten lost
10. Do you like vegetables
11. Do you think it will snow today
12. I wear glasses



F



Writing Corner

Imagine you are Raja. Write six sentences on what happened in school and how you felt when the class did not want to go on a trip without you. Use the words in the strip to fill in the blanks. The beginning is given.

care for me excited sad Mummy
on Saturday many places to see
very happy Sunday happy and proud
the class could go after a week

1. Today the teacher said that our class would go to Puducherry for a trip.
2. Everyone was Excited as there are many Places to see in Puducherry.
3. The teacher said the class would leave on Saturday.
4. I felt sad. Mummy is coming home on Sunday and I could not have gone.
5. Paul asked if The class could go after a week.
6. The teacher said she was happy and proud of her class.
7. I felt very happy that all my classmates care for me.



Creative Corner

Form two groups in class. A child from one group will act out something. The children from the other group have to guess what the actions are. The other group then acts and the first group guesses. This is a very interesting and creative game called 'dumb charade'.

You can try acting out the following:

- dialling a telephone number
- playing cricket
- singing a song
- eating
- sleeping
- dancing



Word Problems

Read the given word problem carefully.

In a garden, there are 9 roses in each row. If there are 25 rows of roses in the garden, how many roses are there in the garden?

Number of rows = 25

Number of roses in one row = 9

Total number of roses = $25 \times 9 = 225$

Therefore, 225 roses are there in the garden.

$$\begin{array}{r}
 \text{H} \quad \text{T} \quad \text{O} \\
 \textcircled{2} \quad \textcircled{4} \quad 5 \\
 \times \quad \quad 9 \\
 \hline
 \textcircled{2} \quad \textcircled{2} \quad \textcircled{5}
 \end{array}$$

F Solve the given word problems.

- (a) There are 15 crayons in a set of crayons. If Hina bought 7 such sets of crayons, how many crayons does she have in all?

Number of crayons in one set

Number of sets

Total number of crayons

$$\begin{array}{r}
 \text{H} \quad \text{T} \quad \text{O} \\
 \quad 3 \quad 1 \quad 5 \\
 \times \quad \quad 7 \\
 \hline
 \textcircled{1} \quad \textcircled{0} \quad \textcircled{5}
 \end{array}$$

Hina has $\textcircled{105}$ crayons in 7 sets of crayons.

- (b) Amandeep has 15 picture albums. In each album, 20 pictures can be pasted. How many pictures can Amandeep paste in these 15 albums?

Number of pictures in each album

Number of albums

Total number of pictures

Amandeep can paste $\textcircled{300}$ pictures in 15 albums.

$$\begin{array}{r}
 \text{H} \quad \text{T} \quad \text{O} \\
 \quad 1 \quad 5 \\
 \times \quad 2 \quad 0 \\
 \hline
 \textcircled{} \quad \textcircled{0} \quad \textcircled{0} \\
 3 \quad 0 \quad \times \\
 \hline
 3 \quad 0 \quad 0
 \end{array}$$

HW

- (c) On Sports Day, 4 types of races were conducted. If 12 students participated in each race, how many students participated in all 4 races?

Number of students in each race

Number of races

Total number of students

$$\begin{array}{r} \text{T} \quad \text{O} \\ 12 \\ \times 4 \\ \hline 48 \end{array}$$

48 students participated in all.

Think, Solve and Learn

1. Rishabh adds 5 ten times and multiplies the answer with 6. What number does he get?
2. Mehak subtracted a number from itself and multiplied the result with 70. What number does she get?
3. Write the 3-digit number obtained by adding 15 ten times repeatedly.

Skills Covered: Critical and logical thinking, Problem-solving, Brainstorming


Maths Around

Dhruv and his friends can plant 5 trees in a week. How many trees can they plant in 7 weeks?


Skills Covered: Observation, Brainstorming, Critical thinking

Brush Up Your Concepts

Count the number of dots on the faces of domino. Then multiply the numbers.




$$9 \times 3 = 27$$




$$8 \times 0 = 0$$

(c)



$$1 \times 9 = 9$$

(d)



$$16 \times 12 = 192$$


$$\begin{array}{r} 16 \\ \times 12 \\ \hline 32 \\ + 160 \\ \hline 192 \end{array}$$


Skills Covered: Critical and logical thinking, Brainstorming, Evaluation, Observation

192


Apply Your Learning

Mohena goes to a candy shop where she gets to see a lot of candies. Look at these jars of different type of candies.



(a) What is the total number of  jars?

$$4 \times 5 = 20$$

(b) What is the total number of  jars?

$$5 \times 6 = 30$$

(c) What is the total number of  jars?

$$10 \times 5 = 50$$

(d) Each jar costs ₹ 50. If she buys two jars of each type, what amount will she pay?

$$2 \times ₹ 20 + 2 \times ₹ 30 + 2 \times ₹ 50 = ₹ 40 + ₹ 60 + ₹ 100 = ₹ 200$$

Skills Covered: Observation, Critical and logical thinking, Evaluation, Brainstorming

Quick Check

1. Fill in the boxes.

(a) 4 times 7 = $\boxed{4} \times \boxed{7} = \boxed{28}$

(b) 5 times 9 = $\boxed{5} \times \boxed{9} = \boxed{45}$

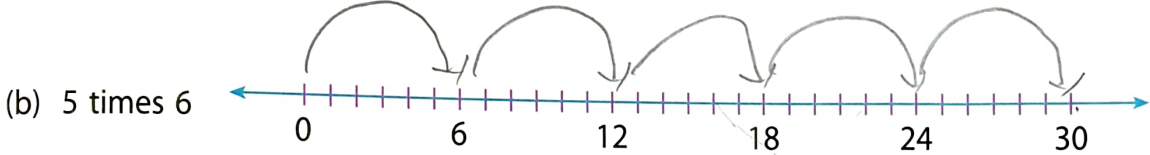
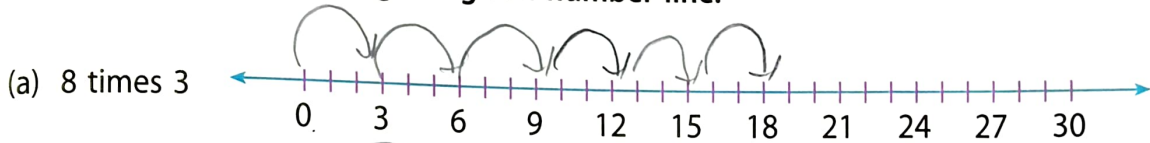
(c) $\boxed{8} \times 4 = \boxed{4} \times 8 = 32$

(d) $7 \times \boxed{8} = 8 \times \boxed{7} = \boxed{56}$

(e) $9 \times 2 = \boxed{2} \times \boxed{9} = \boxed{18}$

(f) $10 \times \boxed{5} = 5 \times \boxed{10} = \boxed{50}$

2. Multiply the numbers using the given number line.



3. Find the product.

(a) $32 \times 3 = 96$

(b) $124 \times 6 = 744$

(c) $106 \times 5 = 530$

(d) $40 \times 20 = 800$

(e) $105 \times 3 = 315$

(f) $20 \times 30 = 600$

4. Solve the given word problems.

- (a) Riya has 6 chalk boxes. Each box has 8 chalks. How many chalks does Riya have in all?

Riya has $\boxed{48}$ chalks in all.

$$\begin{array}{r} \text{T} \quad \text{O} \\ 6 \\ \times 8 \\ \hline \boxed{4} \boxed{8} \end{array}$$

- (b) In a school, there are 45 students in each class. Find the number of students in 6 classes.

There are $\boxed{270}$ students in 6 classes.

$$\begin{array}{r} \text{H} \quad \text{T} \quad \text{O} \\ 45 \\ \times 6 \\ \hline \boxed{2} \boxed{7} \boxed{0} \end{array}$$